

SYMBOL MATH

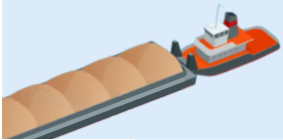
Step one: Figure out what number each symbol represents.



$$+ 2 = 5$$



$$- 1 = 0$$







$$+ 1 = 3$$



$$- 2 = 2$$

In the table, write what number each symbol represents.

 =	 =
 =	 =

Step two: Solve the equations below.




+



=



-



=




-



=



+



=